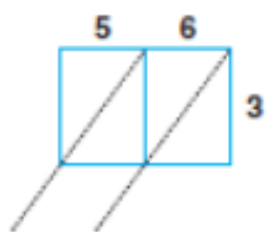
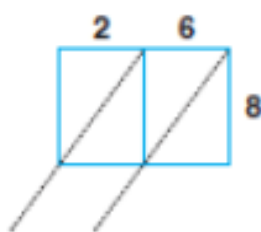


**Part A** Use the lattice method to find the products.

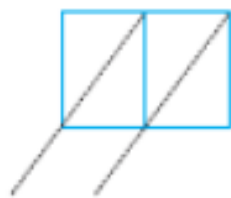
1.  $3 \times 56 =$  \_\_\_\_\_



2.  $8 \times 26 =$  \_\_\_\_\_



3.  $7 \times 74 =$  \_\_\_\_\_



4.  $6 \times 315 =$  \_\_\_\_\_

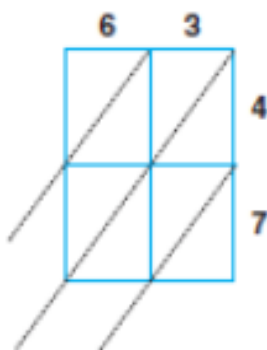


5.  $9 \times 284 =$  \_\_\_\_\_

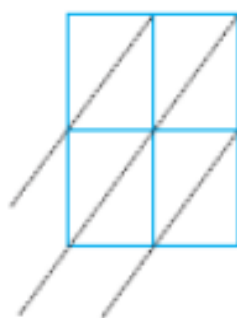


**Part B** Use the lattice method to find the products.

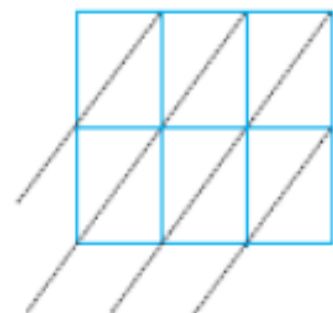
6.  $47 \times 63 =$  \_\_\_\_\_



7.  $26 \times 26 =$  \_\_\_\_\_



8.  $16 \times 473 =$  \_\_\_\_\_



9.  $46 \times 805 =$  \_\_\_\_\_

